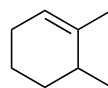
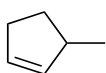
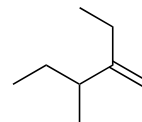
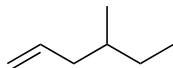
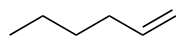
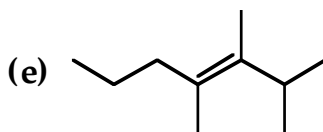
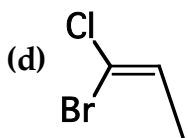
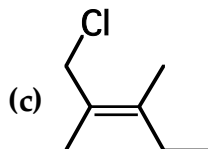
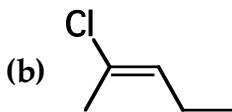
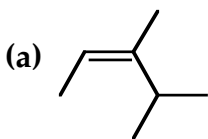


Alkene Nomenclature

Name the following using IUPAC rules

**\*\*Number so that the *alkene* gets the lowest possible number\*\***

Designate the following alkenes as E or Z. Give the full names for (a) and (e).



Designate the following (more complex) alkenes as E or Z:

